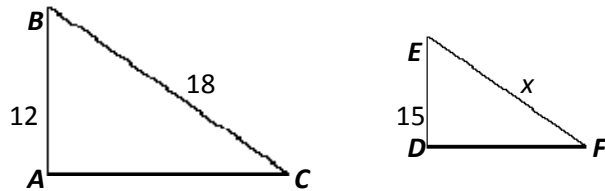


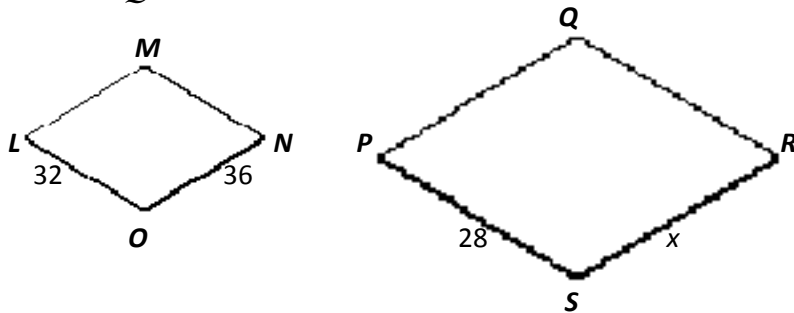
# Similar Figures

Directions: Find the value of  $x$ .

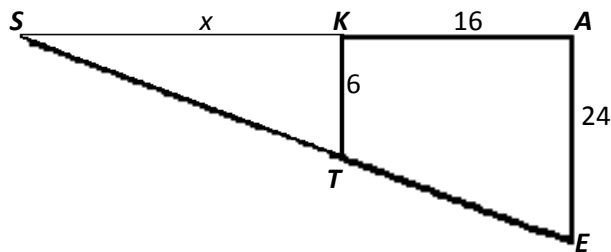
1.  $\triangle ABC \sim \triangle DEF$



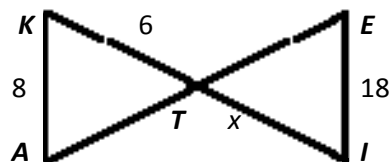
2.  $LMNO \sim PQRS$



3.  $\triangle SKT \sim \triangle SAE$



4.  $\triangle KAT \sim \triangle IET$



5.  $LRIN \sim ORAE$

