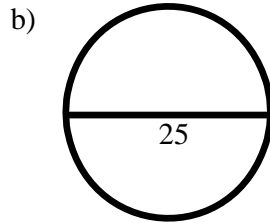
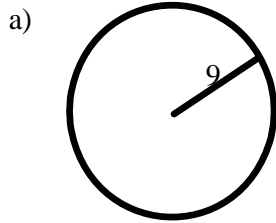
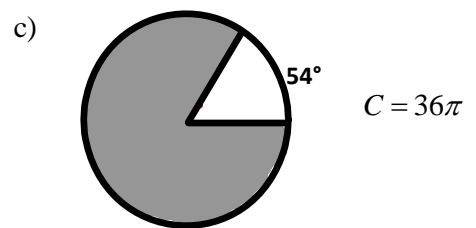
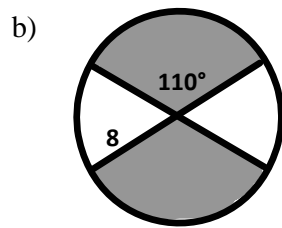
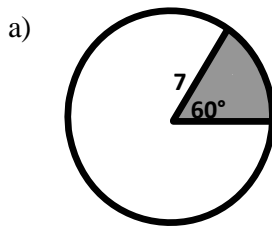


Areas of Circles and Sectors

1. Find the area of each circle.



2. Find the area of the shaded region.



3. Find the radius of circle A. Round your answer to the nearest hundredth.

